


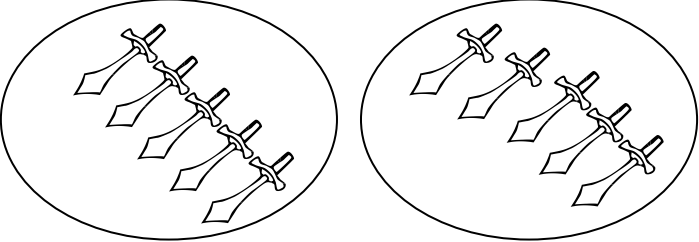
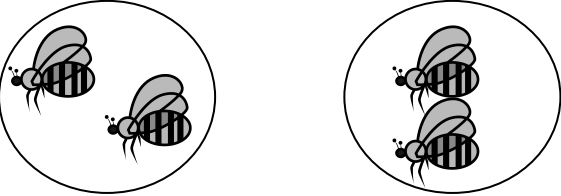


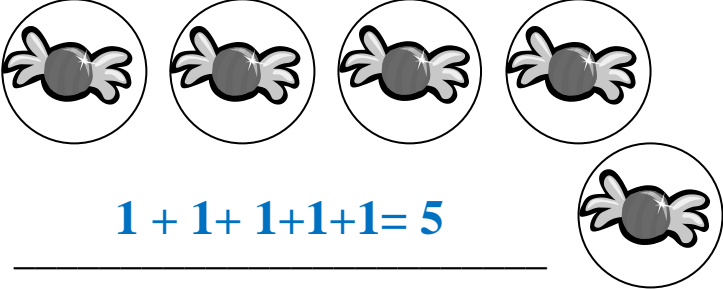


ΠΟΛΛΑΠΛΑΣΙΑΣΜΟΣ (1) - ΣΥΝΟΛΑ

Γράφω τη μαθηματική πρόταση της πρόσθεσης και τη μαθηματική πρόταση του πολλαπλασιασμού.

 $1 + 1 = 2$ $2 \times 1 = 2$	 $2 + 2 + 2 = 6$ <hr/> $3 \times 2 = 6$ <hr/>
 $1 + 1 + 1 = 3$ <hr/> $3 \times 1 = 3$ <hr/>	 $5 + 5 = 10$ <hr/> $2 \times 5 = 10$ <hr/>
 $2 + 2 = 4$ <hr/> $2 \times 2 = 4$ <hr/>	 $1 + 1 + 1 + 1 = 4$ <hr/> $4 \times 1 = 4$ <hr/>
 $3 + 3 + 3 = 9$ <hr/> $3 \times 3 = 9$ <hr/>	 $1 + 1 + 1 + 1 + 1 = 5$ <hr/> $5 \times 1 = 5$ <hr/>

Όνομα: _____ Επίθετο: _____ Τάξη: _____